


Multiply by 3

1 Complete the sentences.

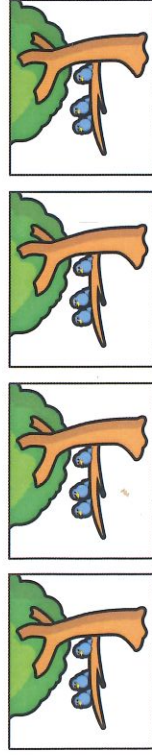


There are equal groups of

$$\square + \square + \square + \square + \square = \square$$

$$\square \times \square = \square$$

b)



There are equal groups of

$$\square = \square + \square + \square$$

$$\square = \square \times \square$$

c)



There are equal groups of


$$\square + \square + \square + \square + \square = \square$$

$$\square \times \square = \square$$

Could you write the number sentences in a different way?

2 Write two multiplication sentences for each part of the question.


a)



$$\square \times \square = \square$$

$$\square \times \square = \square$$

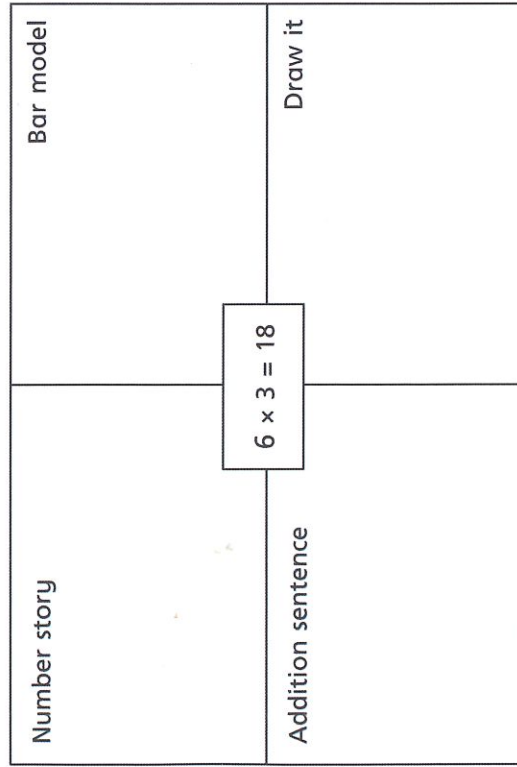




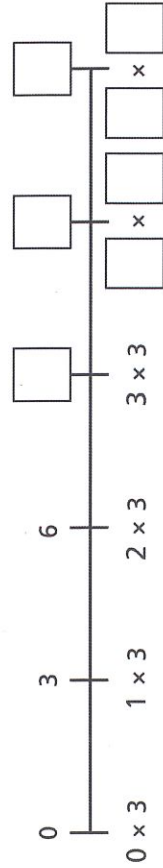
× =

× =

3 Complete the diagram.



4 Complete the number line.



5



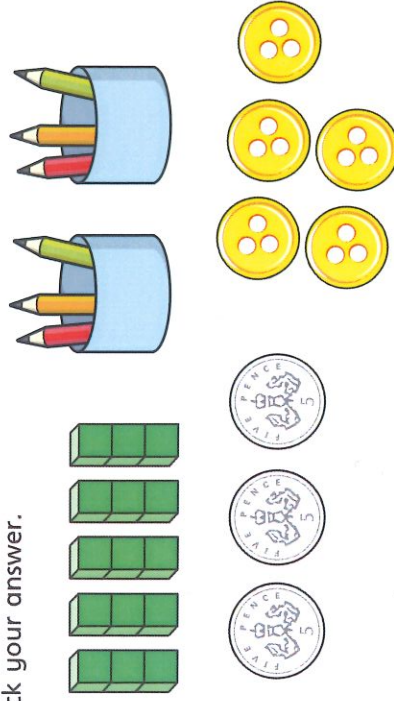
6 lots of 3
is 6 more than
5 lots of 3

Do you agree with Dora? _____
Explain why.

6

Which is the odd one out?

Tick your answer.



Explain your answer.

Is there more than one answer?

